

# BOARD ACTIVITY SHEET: MARCH 2024

## Science and Technology Part - 1

Time: 2 Hours

Max. Marks: 40

- Note:**
- All questions are compulsory.
  - Use of a calculator is not allowed.
  - The numbers to the right of the questions indicate full marks.
  - In case of MCQs (Q. No. 1(A)) only the first attempt will be evaluated and will be given credit.
  - Scientifically correct, labelled diagrams should be drawn wherever necessary.

**Q.1. (A) Write the correct alternative:**

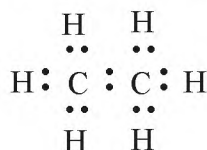
[5]

- The SI unit of heat is \_\_\_\_\_.  
(A) calorie (B) joule  
(C) kcal/kg °C (D) cal/g °C
- We can see the sun even when it is little below the horizon because of \_\_\_\_\_.  
(A) Reflection of light (B) Refraction of light  
(C) Dispersion of light (D) Absorption of light
- \_\_\_\_\_ is the functional group of carboxylic acid.  
(A) —COOH— (B) —CO—  
(C) —CHO— (D) —OH—
- In simple microscope \_\_\_\_\_ lens is used.  
(A) Concave (B) Plano concave  
(C) Plano convex (D) Convex
- In \_\_\_\_\_ process a layer of molten tin is deposited on metals.  
(A) Anodization (B) Tinning  
(C) Galvanizing (D) Alloying

**(B) Answer the following:**

[5]

- Write the name of the atom having the smallest size.
- Write the molecular formula of calcium carbonate.
- Write the use of 'Calorimeter'.
- Identify the hydrocarbon from the given electron-dot structure :



- Match the columns:

Column 'A'		Column 'B'
Refractive index of water	(a)	1.31
	(b)	1.36
	(c)	1.33

**Q.2. (A) Give scientific reasons (any two):**

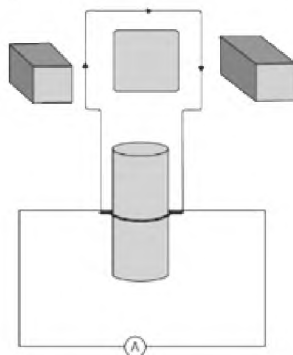
[4]

- When the gas formed on heating limestone, is passed through freshly prepared lime water, the lime water turns milky.
- Tungsten metal is used to make a solenoid type coil in an electric bulb.
- On exposure to air, silver articles turn blackish after some time.

**(B) Answer the following (any three):**

[6]

- State Dobereiner's law of triad. Give *one* example of it.
- Identify the figure and explain its use:



- What is meant by satellite launch vehicle? Name any one Indian satellite launch vehicle.
- What is free fall? When is it possible?
- The focal length of a convex lens is 20 cm. What is its power?

**Q.3. Answer the following questions (any five):**

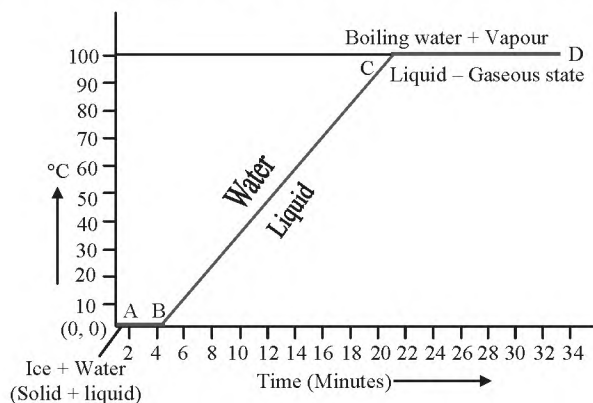
[15]

- Select the appropriate option and complete the following paragraph :

(Metals, non-metals, metalloids, four, seven, s-block, p-block, d-block, f-block.)

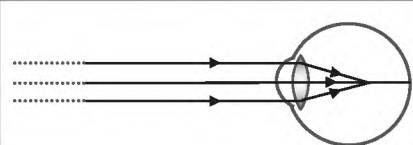
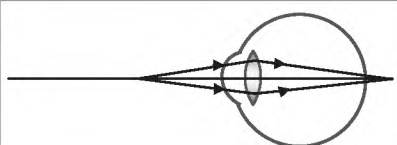
On the basis of electronic configuration, elements in the modern periodic table are classified into \_\_\_\_\_ blocks. Group 1 and 2 elements are included in \_\_\_\_\_ and all these elements are metals. (except hydrogen). Group 13 to 18 elements are included in \_\_\_\_\_. This block contains metals, non-metals and metalloids. Group 3 to 12 elements are included in \_\_\_\_\_ and all the elements are \_\_\_\_\_ elements shown at the bottoms of the periodic table i.e., lanthanides and actinides constitute \_\_\_\_\_ and all these elements are metals.

- What are the factors affecting the rate of chemical reaction?
  - Explain any *one* factor.
- Observe the following graph answer the following questions.




- What does the graph represent?
- What does the line AB represent?
- What does the line BC represent?

iv. Complete the following table by observing the given figures:

Points ↓	Figure →		
(a)	Name of the defect	_____	_____
(b)	Position of the image	_____	_____
(c)	Lens used to correct the defect.	_____	_____

v. Write any *three* general properties of ionic compounds.

vi. Observe the figure and answer the questions:



- State Newton's universal law of gravitation.
- If the distance between the two bodies is tripled, how will the gravitational force between them change?
- What will happen to gravitational force, if mass of one of the objects is doubled?

vii. The orbit of a satellite is exactly 35780 km above the Earth's surface and its tangential velocity is 3.08 km/s.

How much time the satellite will take to complete one revolution around the earth?

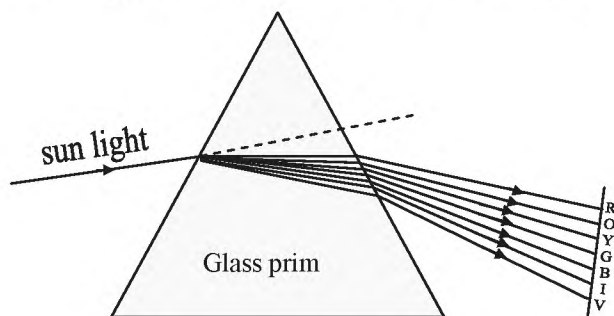
(Radius of the Earth = 6400 km.)

viii. What is a solenoid? Draw a neat diagram and name its various components.

**Q.4. Answer the following questions (any one):**

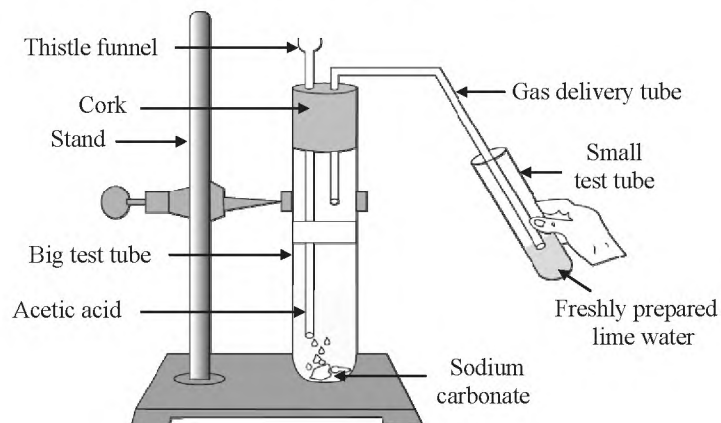
**[5]**

i. Observe the given diagram and answer the questions :



- Name the process shown in the figure.
- Name the colour that deviates the most.
- Name the colour that deviates the least.
- Name any *one* phenomenon in the nature which is based on the above process.
- Define 'spectrum'.

ii. Observe the diagram given below and answer the questions :



- Name the reactants in this reaction.
- Which gas comes out as effervescence in the bigger test tube?
- What is the colour change in the lime water?
- In the above experiment instead of sodium carbonate which chemical can be used to get same product?
- Write the use of acetic acid.